

Name: _____ Sec: _____ Roll no: _____

1). What number comes before 1000

- a). 998 b). 900 c). 999 d). 1001

2). The numeral for eighty three is

- a). 82 b). 83 c). 38 d). 3

3). The triangle has _____ sides

- a). 2 b). 3 c). 4 d). None

4). The length and breadth of your book is measured in _____

- a). m b). km c). cm d). None

5). 1 litre + 800 ml = _____ ml

- a). 1188 b). 1000 c). 800 d). 1800

6). 19 is less than 23 by _____

- a). 3 b). 4 c). 2 d). 5

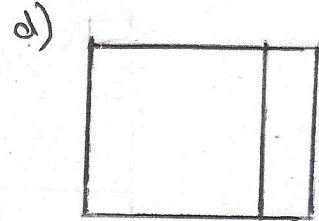
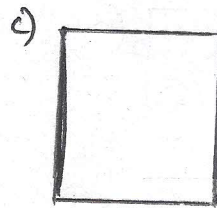
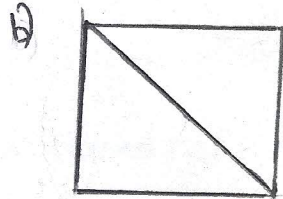

7). 7 tens + _____ ones = 78

- a). 18 b). 7 c). 8 d). none

8). Odd numbers between 19 and 29 are

- a).3 b).4 c).2 d).1

9). Which figure is shaded into half ($\frac{1}{2}$)



a) b

b) d

c) a

d) c

10). Out of 386 and 863 the place of 3 is greater in _____

- a).863 b).386 c).a&b d).none

11) In which month does Gandhi Jayanti Falls?

- a). October b) August c) January d) November

12). How many days are there in the month of August

- a).30 b).31 c).29 d).both a & b

13). $6 \times 5 = 3$ tens

- a). True b) False c) Both a& b d) None