

LOGICAL REASONING

1. Select the shape which is exactly embedded in the Figure (X).

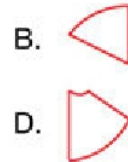



Figure (X)

2. There are ____ equal groups of flowers having 6 flowers in each group.

- A. 10
B. 6
C. 12
D. 8



3. How many triangles can be formed using below toothpicks, if each toothpick is used only once?

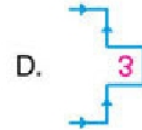
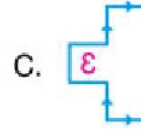
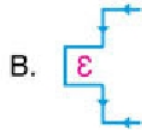
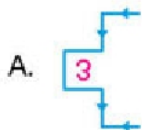
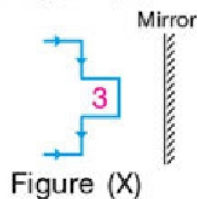
- A. 8
B. 12
C. 6
D. 4



4. If 'Circle' means 'Square', 'Square' means 'Rectangle', 'Rectangle' means 'Triangle', then which figure can be drawn having four equal sides?

- A. Circle B. Square C. Rectangle D. Triangle

5. Select the correct mirror image of Figure (X).



SPACE FOR ROUGH WORK