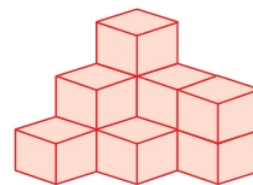


LOGICAL REASONING

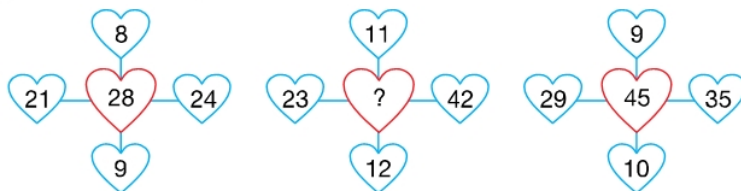
1. Find the number of cubes in the given figure.

- A. 9
- B. 10
- C. 11
- D. 12

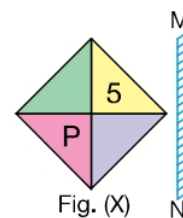
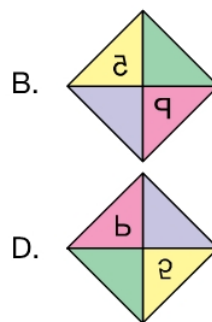
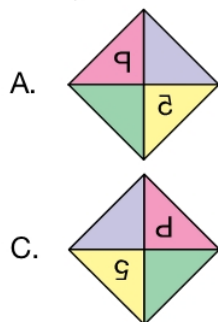


2. Find the missing number in the given number pattern.

- A. 30
- B. 42
- C. 48
- D. 52

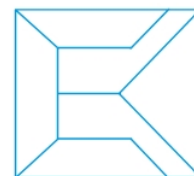


3. Which of the following options shows the mirror image of Fig. (X), if the mirror is placed along MN?



4. Which of the following alphabets is NOT present in the given logo?

- A. E
- B. V
- C. A
- D. F



5. Latika, Garima, Beena and Megha were standing in a line to buy chocolates. Beena stood immediately after Latika. Garima was between Megha and Latika. Who was last in the line?

- A. Latika
- B. Garima
- C. Beena
- D. Megha

Space for Rough Work