





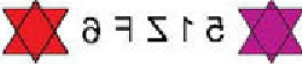

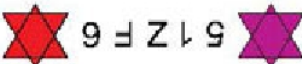
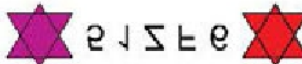


6. If  and , then which of the following is neither lightest nor heaviest?
- A.  B. 
 C.  D. Can't be determined

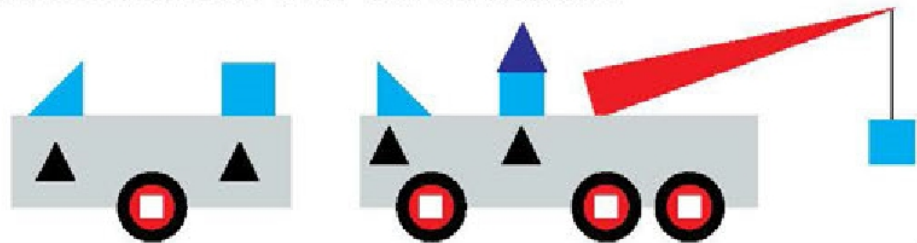
7. Find the mirror image of the given figure, if the mirror is placed along PQ.



A.  B. 
 C.  D. 

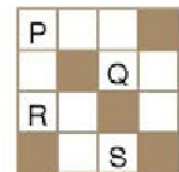
8. How many fewer circles are there in the figure than the triangles?

- A. 0
 B. 1
 C. 2
 D. None of these








9. Which square must be shaded so that the figure has a line of symmetry?

- A. P
 B. Q
 C. R
 D. S



10. Select the figure from the options which is exactly embedded in the given Fig. (X).

A.  B. 
 C.  D. 


 Fig. (X)

SPACE FOR ROUGH WORK