


17. The given clock shows the time when the movie starts.



The movie lasted for 3 hours 40 minutes. Which clock shows the time when movie ended?



18. Four friends answered the question shown in the adjoining black-board.

Garima's Answer : Three thousand five hundred seven

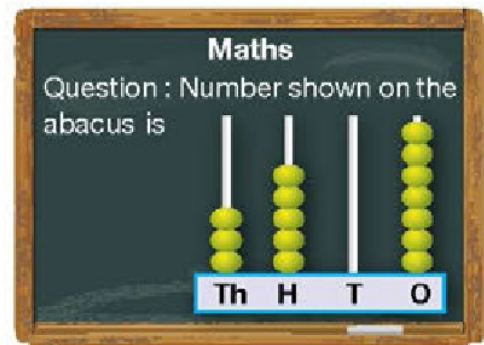
Shalini's Answer : Three thousand five hundred seventy

Ritu's Answer : Three fifty seven

Shuchi's Answer : Thirty five thousand seven

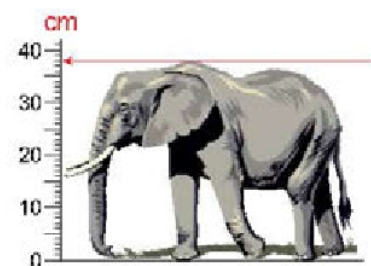
Who amongst them answered correctly?

- A. Garima
- B. Shalini
- C. Ritu
- D. Shuchi



19. What is the height of the elephant?

- A. 36 cm
- B. 37 cm
- C. 38 cm
- D. 39 cm



SPACE FOR ROUGH WORK