


6. How many two-digit numbers between 10 to 40 have the digit at the ten's place smaller than that of the one's place?

- A. 19 B. 20 C. 21 D. 22

7. Which of the following figures will complete the given figure pattern?

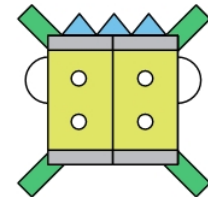


8. Select the odd one out.

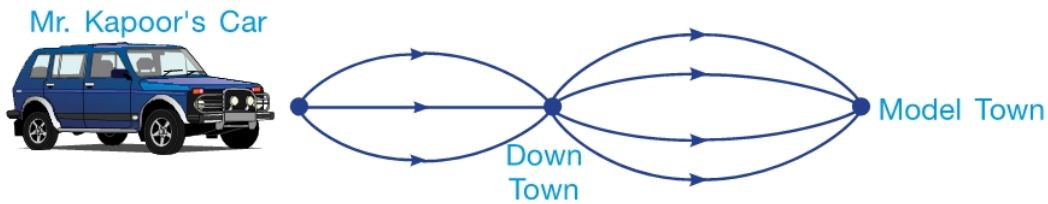


9. The given figure is made up of _____ straight lines.

- A. 18
B. 26
C. 25
D. 21



10. Mr. Kapoor needs to drive to Model Town via Down Town to meet Mr. Verma. Below shows the routes that he can take.



How many different ways are there for Mr. Kapoor to go to Model Town?

- A. 12 B. 15 C. 10 D. 8

Space for Rough Work